

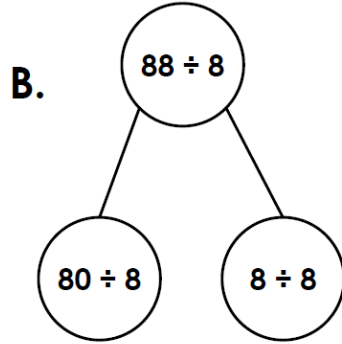
Divide 2-Digits by 1-Digit 1

Divide 2-Digits by 1-Digit 1

4a. Circle the odd one out.

A.

Tens	Ones
●	
●	
●	
●	
●	
●	
●	



C.

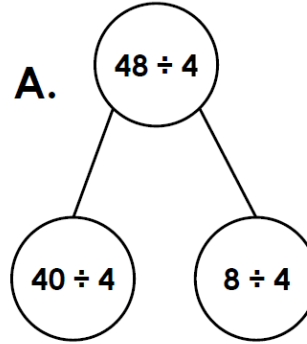
88							
11	11	11	11	11	11	11	11



Explain your reasoning.

R

4b. Circle the odd one out.



B.

Tens	Ones
●	● ●
●	● ●
●	● ●
●	● ●

C.

44			
11	11	11	11




Explain your reasoning.

R

5a. Mr Rogers has a box of ____ books.

He gives an equal number of books to each of his three helpers to give out.



How many books does each child get?



PS

5b. A zookeeper has ____ bamboo shoots.

She gives an equal number of bamboo shoots to each of the three pandas.



How many shoots does each panda get?



PS

6a. Use the clues to work out Alisha's number.

I am thinking of a number.

When I divide my number by 8, I get the answer 11.

What is my number?



PS

6b. Use the clues to work out Alan's number.

I am thinking of a number.

When I divide my number by 4, I get the answer 12.

What is my number?



PS